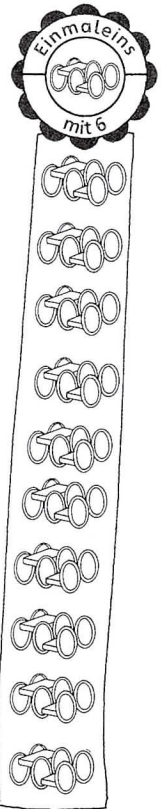


Meine Bilder zur Sechser-Reihe



1	Pedalos	1	2	3	4	5	6	7	8	9	10
	Räder										

2

$4 \cdot 6 = \underline{\quad}$

$2 \cdot 6 = \underline{\quad}$

$5 \cdot 6 = \underline{\quad}$

3



$8 \cdot 6 = \underline{\quad}$

4

$7 \cdot 6 = \underline{\quad}$

$3 \cdot 6 = \underline{\quad}$

5 Aufgabe und Tauschaufgabe



7

$\quad \cdot \quad = \quad$

$\quad \cdot \quad = \quad$

6

$1 \cdot 6 = \underline{\quad}$

$2 \cdot 6 = \underline{\quad}$

$3 \cdot 6 = \underline{\quad}$

$4 \cdot 6 = \underline{\quad}$

$5 \cdot 6 = \underline{\quad}$

$6 \cdot 6 = \underline{\quad}$

$7 \cdot 6 = \underline{\quad}$

$8 \cdot 6 = \underline{\quad}$

$9 \cdot 6 = \underline{\quad}$

$10 \cdot 6 = \underline{\quad}$