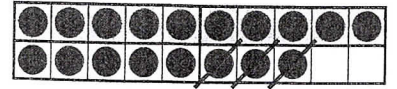




## Subtrahieren im Zahlenraum bis 20

1



$$5 - 2 = \underline{\quad}$$

$$6 - 4 = \underline{\quad}$$

$$8 - 3 = \underline{\quad}$$

$$15 - \underline{2} = \underline{\quad}$$

$$16 - \underline{\quad} = \underline{\quad}$$

$$\underline{\quad} - \underline{\quad} = \underline{\quad}$$

2



$$8 - 2 = \underline{\quad}$$

$$18 - \underline{\quad} = \underline{\quad}$$

$$7 - 5 = \underline{\quad}$$

$$\underline{\quad} - \underline{\quad} = \underline{\quad}$$

$$9 - 6 = \underline{\quad}$$

$$\underline{\quad} - \underline{\quad} = \underline{\quad}$$

3



Kleine Aufgabe – große Aufgabe. Male und rechne.

$5 - 3 = \underline{\quad}$

$18 - 4 = \underline{\quad}$

$6 - 5 = \underline{\quad}$

$14 - 2 = \underline{\quad}$

$3 - 2 = \underline{\quad}$

$15 - 3 = \underline{\quad}$

$7 - 4 = \underline{\quad}$

$16 - 5 = \underline{\quad}$


$8 - 4 = \underline{\quad}$

$13 - 2 = \underline{\quad}$

$4 - 2 = \underline{\quad}$

$17 - 4 = \underline{\quad}$

4



$14 - 3 = \underline{\quad}$

$18 - 6 = \underline{\quad}$

$17 - 6 = \underline{\quad}$

$16 - 2 = \underline{\quad}$

$15 - 4 = \underline{\quad}$

$19 - 4 = \underline{\quad}$

$13 - 3 = \underline{\quad}$

$17 - 2 = \underline{\quad}$

$18 - 5 = \underline{\quad}$

$15 - 4 = \underline{\quad}$

$19 - 5 = \underline{\quad}$

$20 - 3 = \underline{\quad}$

5



$16 - 1 = \underline{\quad}$

$20 - 8 = \underline{\quad}$

$19 - 2 = \underline{\quad}$

$16 - 2 = \underline{\quad}$

$20 - 6 = \underline{\quad}$

$18 - 3 = \underline{\quad}$